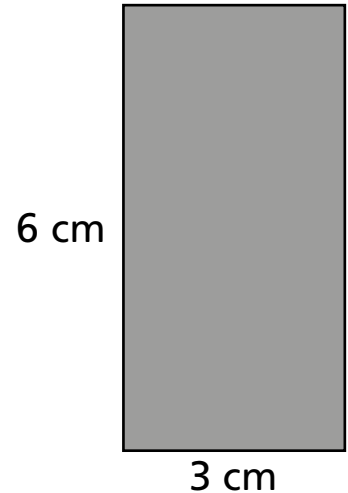
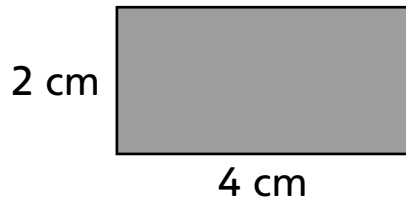
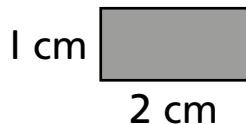


Deepen Activities

1 Work out the perimeter of these rectangles in two different ways:



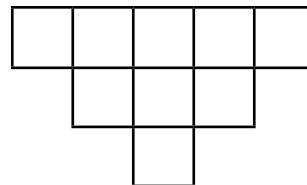

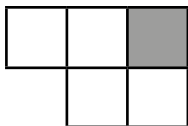
Draw three more different rectangles and ask a partner to calculate the perimeter.

I know a way to work it out that is quicker than adding all four sides.



- 2
- Work out the perimeter of a square with sides 1 cm by 1 cm.
 - Work out the perimeter of a square with sides 3 cm by 3 cm.
 - Work out the perimeter of a square with sides 6 cm by 6 cm.

3 Find the perimeters of these shapes if each square has sides of 1 cm:



Draw a shape using 10 squares and ask your partner to find the perimeter.

I wonder if all shapes made from 10 squares have the same perimeter.

